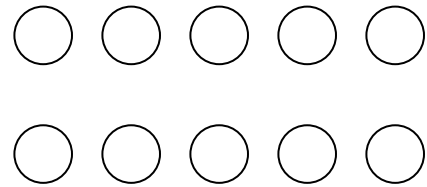
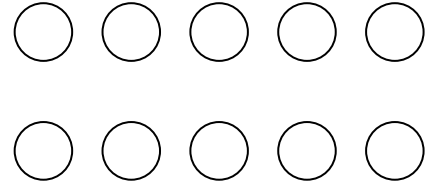


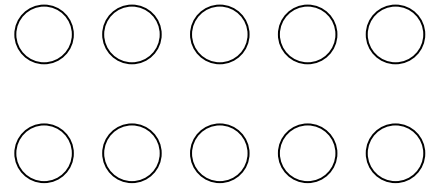
$$6 + 1 = \square$$



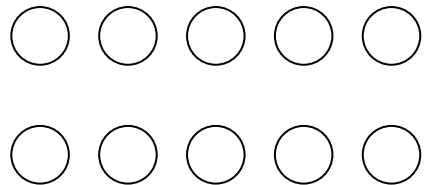
$$7 + 1 = \square$$



$$8 + 1 = \square$$

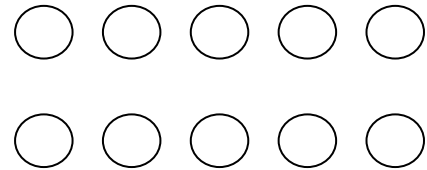


$$9 + 1 = \square$$



Fill in the number sentences. Color the circles.

$$\square + 1 = \square$$



$$\square + 1 = \square$$

